



Solve each problem.

Answers

1) A grocery store had 42 bottles of regular soda and 39 bottles of diet soda. How many bottles did they have total?

1. _____

2) A restaurant sold 50 sodas in the morning and 14 in the afternoon. How many sodas did they sell total?

2. _____

3) A fast food restaurant sold 42 small hotdogs and 38 large hotdogs. How many hotdogs did they sell total?

3. _____

4) Dave had 13 dollars saved up. After doing some chores his mother gave him another 45 dollars. How much money does he have total?

4. _____

5) At the fair Sarah started with 36 tickets and then bought 40 more. How many tickets did Sarah have total?

5. _____

6) Edward had \$41. Later he sold some of his old toys and got another \$48. How much money does he have total?

6. _____

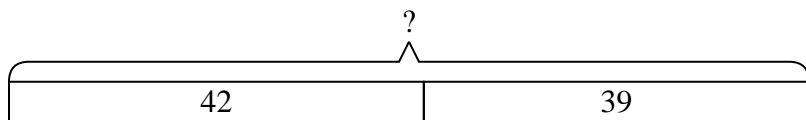
7) In the first half of a trivia game Kaleb scored 22 points. In the second half he scored 32 points. How many points did he score total?

7. _____

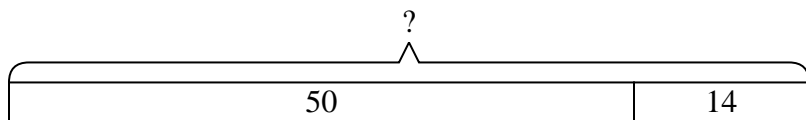


Solve each problem.

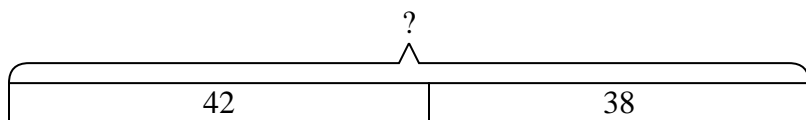
- 1) A grocery store had 42 bottles of regular soda and 39 bottles of diet soda. How many bottles did they have total?



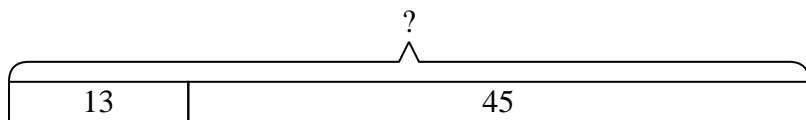
- 2) A restaurant sold 50 sodas in the morning and 14 in the afternoon. How many sodas did they sell total?



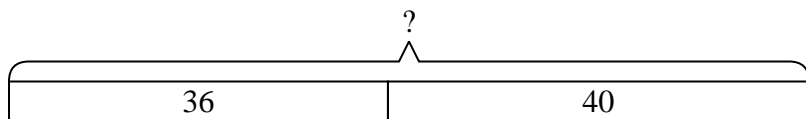
- 3) A fast food restaurant sold 42 small hotdogs and 38 large hotdogs. How many hotdogs did they sell total?



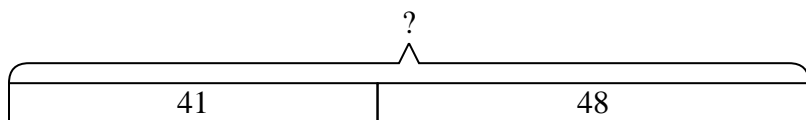
- 4) Dave had 13 dollars saved up. After doing some chores his mother gave him another 45 dollars. How much money does he have total?



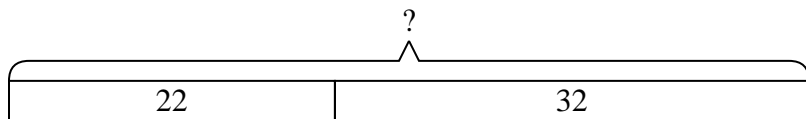
- 5) At the fair Sarah started with 36 tickets and then bought 40 more. How many tickets did Sarah have total?



- 6) Edward had \$41. Later he sold some of his old toys and got another \$48. How much money does he have total?



- 7) In the first half of a trivia game Kaleb scored 22 points. In the second half he scored 32 points. How many points did he score total?



Answers

1. 81

2. 64

3. 80

4. 58

5. 76

6. 89

7. 54